


Make 6 buns.



Share between 2 teddies.




How many each?

Get 8 grapes.



Share between 4 teddies.



How many each?

Get 12 cherry tomatoes.



Share between 4 teddies.




How many each?

Get 6 apples.



Share between 4 teddies.



How many each?